

Identifying Examples and Non-examples

- Sort the **Identifying Examples and Non-examples Cards** into two groups:
 - Examples of fourths or eighths
 - Non-examples of fourths or eighths
- Use your sort to answer the questions below.

1 Which card(s) are non-examples of fourths or eighths?

Card(s): _____

2 Which card(s) are examples of fourths or eighths?

Card(s): _____

3 Choose one of the cards you think is an example of fourths or eighths.

Card _____

a) Cut the parts along the solid black lines to justify that the parts cover the same area. Tape or glue the parts below.


b) The rectangle I chose has _____ parts that cover the same area. One of these parts is one-_____.

c) Do parts of an object have to have the same shape in order for the object to be equally partitioned? Why or why not?

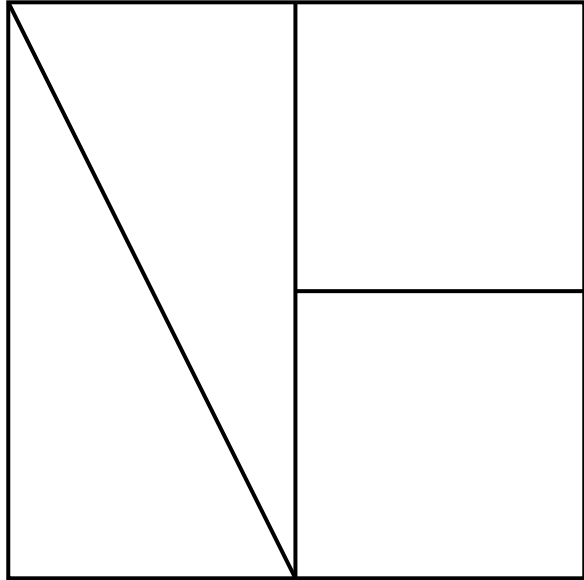
Identifying Examples and Non-Examples Cards

Cut along the dashed lines.


Card A



Card B



Card C



Card D

