


Name _____ Date _____

Counting and Naming Fractional Parts

One whole equals:



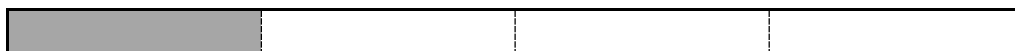
1 What fractional part of the whole is shaded? _____



2 What fraction is represented by the shaded parts? _____



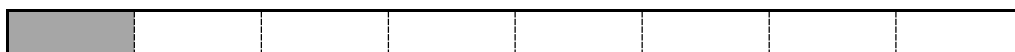
3 What fractional part of the whole is shaded? _____



4 What fraction is represented by the shaded parts? _____



5 What fractional part of the whole is shaded? _____



6 What fraction is represented by the shaded parts? _____

